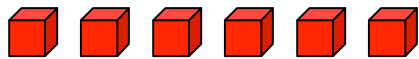


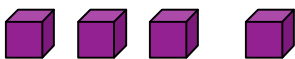


Name: _____

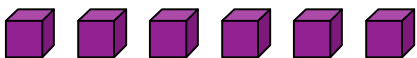
For each example, circle the 2 groups of cubes that make 10 and then solve the addition problem:



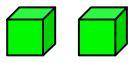
$$4 + 3 + 6 = \underline{\hspace{2cm}}$$



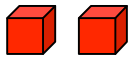
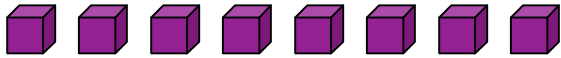
$$5 + 5 + 4 = \underline{\hspace{2cm}}$$



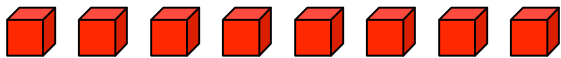
$$9 + 1 + 6 = \underline{\hspace{2cm}}$$



$$2 + 3 + 7 = \underline{\hspace{2cm}}$$



$$5 + 2 + 8 = \underline{\hspace{2cm}}$$



$$5 + 8 + 5 = \underline{\hspace{2cm}}$$
